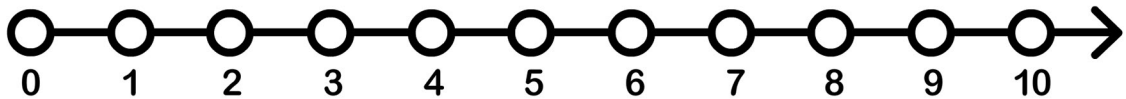
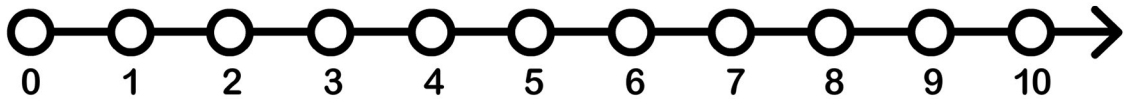


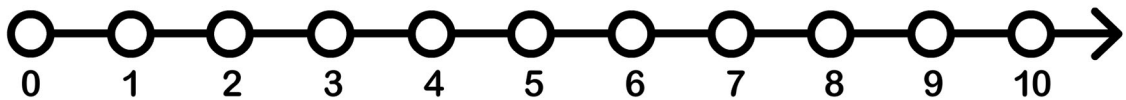
$$9 - 4 = \underline{\quad}$$



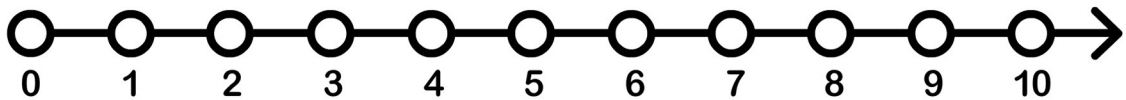
$$6 - 2 = \underline{\quad}$$



$$10 - 8 = \underline{\quad}$$



$$5 - 1 = \underline{\quad}$$



$$8 - 4 = \underline{\quad}$$