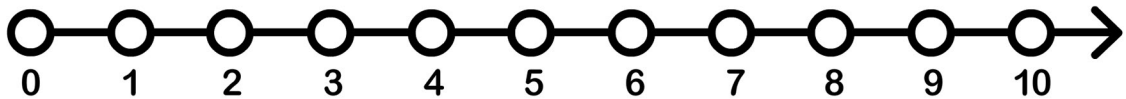
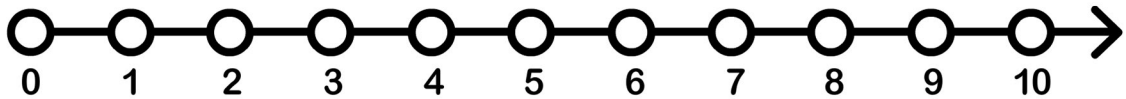


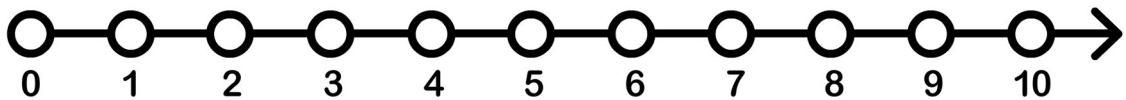
$$3 - 2 = \underline{\quad}$$



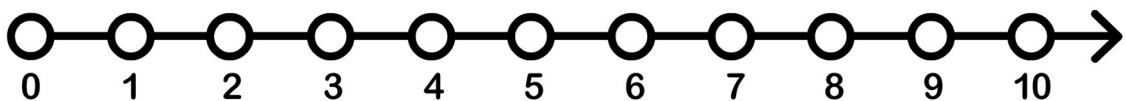
$$8 - 1 = \underline{\quad}$$



$$4 - 4 = \underline{\quad}$$



$$10 - 3 = \underline{\quad}$$



$$7 - 5 = \underline{\quad}$$