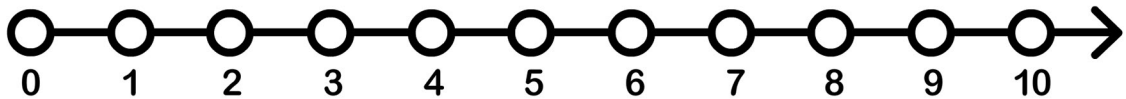
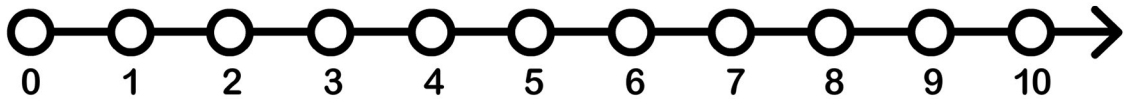


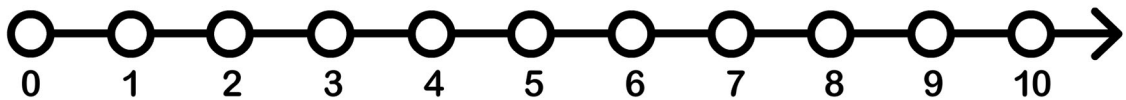
$$9 - 6 = \underline{\quad}$$



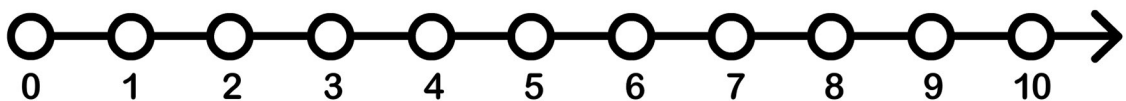
$$2 - 1 = \underline{\quad}$$



$$6 - 5 = \underline{\quad}$$



$$5 - 3 = \underline{\quad}$$



$$10 - 1 = \underline{\quad}$$