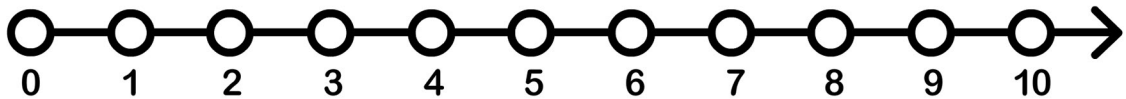
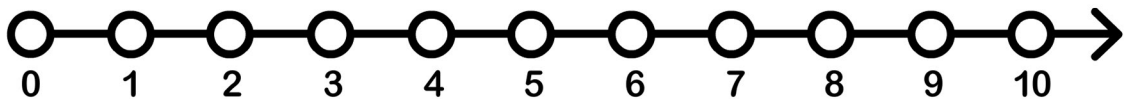


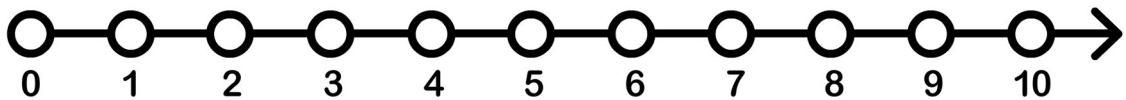
$$6 - 3 = \underline{\quad}$$



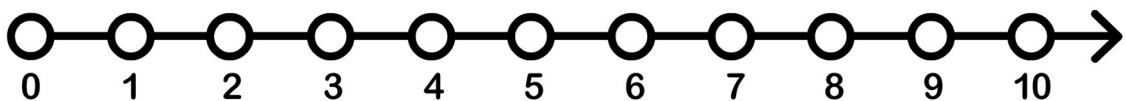
$$8 - 5 = \underline{\quad}$$



$$4 - 2 = \underline{\quad}$$



$$8 - 8 = \underline{\quad}$$



$$7 - 2 = \underline{\quad}$$