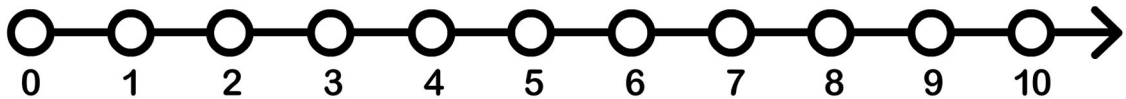
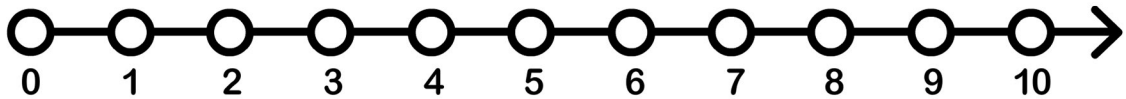


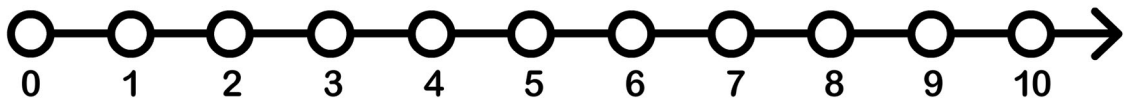
$$10 - 2 = \underline{\quad}$$



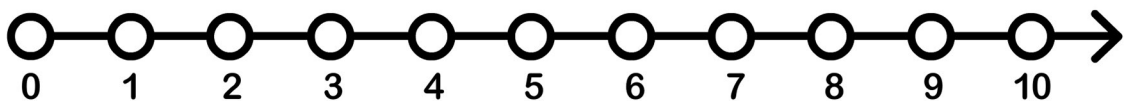
$$7 - 3 = \underline{\quad}$$



$$4 - 1 = \underline{\quad}$$



$$9 - 7 = \underline{\quad}$$



$$7 - 4 = \underline{\quad}$$