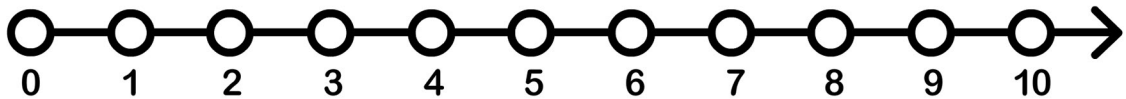
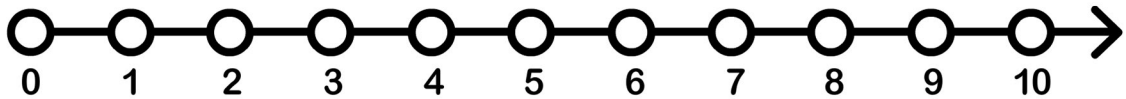


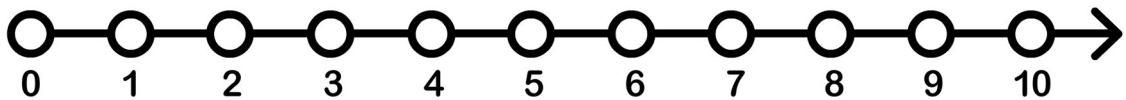
$$3 - 1 = \underline{\quad}$$



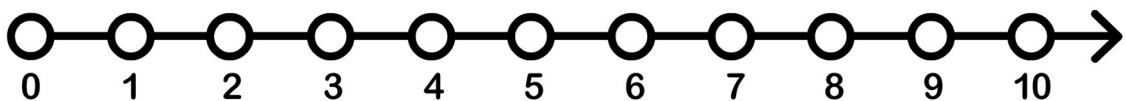
$$10 - 4 = \underline{\quad}$$



$$7 - 1 = \underline{\quad}$$



$$5 - 2 = \underline{\quad}$$



$$10 - 6 = \underline{\quad}$$